



CALDERGLEN HIGH SCHOOL

PRACTICAL ELECTRONICS

HOMEWORK 4

GRADE	MARK
A+	10
A	9
B+	8
B	7
C+	6
C	5
FAIL	0-4
TOTAL	___ / 10

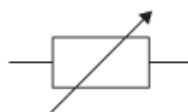
SYMBOL RECOGNITION

TASK:-

In the boxes provided name these symbols used in circuit diagrams for electronics.



1)



6)



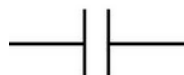
2)



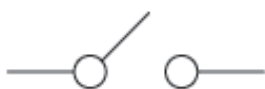
7)



3)



8)



4)



9)



5)



10)

NAME: _____

CLASS: _____

After completing this homework, you should get your parent/guardian to sign in the space below and return on or before the date due.

PARENT/GUARDIAN: _____

DATE: _____