

# CALDERGLEN HIGH SCHOOL

## PRACTICAL ELECTRONICS

### HOMEWORK 3

| GRADE | MARK     |
|-------|----------|
| A+    | 10       |
| A     | 9        |
| B+    | 8        |
| B     | 7        |
| C+    | 6        |
| C     | 5        |
| FAIL  | 0-4      |
| TOTAL | ___ / 10 |


#### SOLDERING TOOLS AND EQUIPMENT 2

TASK:-

In the boxes provided name these tools or equipment used for soldering.




1)



6)



2)



7)



3)



8)



4)



9)



5)



10)

NAME: \_\_\_\_\_

CLASS: \_\_\_\_\_

After completing this homework, you should get your parent/guardian to sign in the space below and return on or before the date due.

PARENT/GUARDIAN: \_\_\_\_\_

DATE: \_\_\_\_\_



# CALDERGLEN HIGH SCHOOL

## PRACTICAL ELECTRONICS

### HOMEWORK 4

| GRADE | MARK     |
|-------|----------|
| A+    | 10       |
| A     | 9        |
| B+    | 8        |
| B     | 7        |
| C+    | 6        |
| C     | 5        |
| FAIL  | 0-4      |
| TOTAL | ___ / 10 |

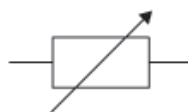
#### SYMBOL RECOGNITION

TASK:-

In the boxes provided name these symbols used in circuit diagrams for electronics.



1)



6)



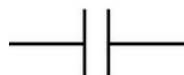
2)



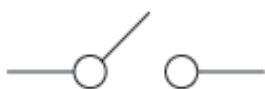
7)



3)



8)



4)



9)



5)



10)

NAME: \_\_\_\_\_

CLASS: \_\_\_\_\_

After completing this homework, you should get your parent/guardian to sign in the space below and return on or before the date due.

PARENT/GUARDIAN: \_\_\_\_\_

DATE: \_\_\_\_\_